

Maths Assignment-2 on 31-7-2024

Portion: Ch 3 Subtraction (Subtraction on number line and Estimation of difference omitted)
Ch 4 Multiplication (till page 70)

To be submitted on 26-7-2024

DELHI PUBLIC SCHOOL, NERUL, NAVI MUMBAI
SESSION 2024-2025
MATHS PRACTICE ASSIGNMENT – 2
CLASS - III

Name:

Class/sec:

Roll No:

Q1. Circle the correct option:

1) $395 - \underline{\quad} = 394$

- a) 0 b) 1 c) 2 d) 395

2) The difference between the largest 3-digit number and 296 is _____

- a) 999 b) 703 c) 307 d) 296

3) 2 dozen apples = _____ apples

- a) 20 b) 22 c) 24 d) 42

4) How many legs do 9 lions have?

- a) 36 b) 18 c) 9 d) 27

5) One hundred less than 596 is _____

- a) 396 b) 496 c) 586 d) 696

6) The predecessor of 305 is _____

- a) 304 b) 306 c) 503 d) 303

7) _____ $\times 9 = 63$

- a) 6 b) 7 c) 9 d) 2

Q2. Find the difference between 641 and 900.

PTO

Q3. The price of 1kg of apples is ₹280 and that of 1kg of mangoes is ₹237. Which fruits costs more and by how much?

Q4. Solve:

a) $750 - 300$

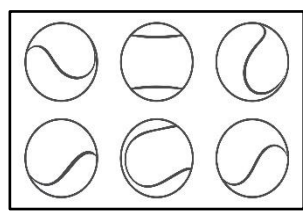
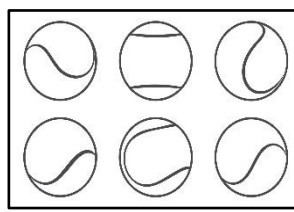
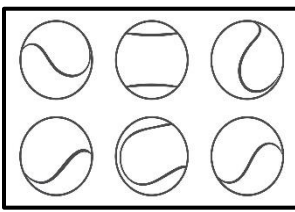
b) $902 - 218$

Q5. Write the multiplication of all the possible numbers to get the given product:

a) $44 \rightarrow$

b) $30 \rightarrow$

Q6. Draw one more set and fill in the blanks:



$\underline{\quad} \times \underline{\quad} = \underline{\quad}$
