

to be submitted on:23.08.24 (Friday)

**DELHI PUBLIC SCHOOL
NERUL, NAVI MUMBAI
MATHEMATICS PRACTICE ASSIGNMENT-2
SESSION 2024-25
CLASS II**

DATE OF THE ASSIGNMENT: 28.08.2024 (Wednesday)

PORTION

Textbook: Ripples Semester 1

Portion: Ch 2: Addition Ex: 2C, 2F, Expanded form and short form

Refer the notebook work also.

Name: _____ **Section:** _____ **Roll no.** _____

Q1) Fill in the blanks:

a) $699 + 1 =$ _____

b) $28 + 0 =$ _____

c) Answer of addition is called as _____ .

d) $1 + 100 =$ _____

e) $52 + 8 = 8 +$ _____

f) $324 + 5 =$ _____ $+ 324$

Q2) Match the following:

1. $200 + 50 + 9$	a. 800
2. $140 + 10$	b. $500 + 80 + 7$
3. 587	c. 803
4. $798 + 5$	d. 259
5. $1 + 799$	e. 150

Ans: 1. _____; 2. _____; 3. _____; 4. _____; 5. _____

Q3) Find the sum:

a) H T O
 5 3 7
+ 3 6 0

b) H T O
 8 6 5
+ 7 3

c) H T O
 2 4 9
+ 3 2 9

d) H T O
 1 3 6
+ 3 9 5

e) H T O
 4 7 0
+ 3 6 9

f) H T O
 3 9 6
+ 9

Q4) Write in columns and add:

a) $46 + 27$

T	O

b) $59 + 48$

H	T	O

c) $734 + 188$

H	T	O

Q5) State True or False:




a) $200 + 100 = 201$ [_____]

b) $400 + 60 = 460$ [_____]

c) $98 + 9 = 107$ [_____]




d) $725 = 700 + 2 + 5$ [_____]

Q6) Solve the following:

- a) There are 54 
32  more joined in.
How many  are there in total?

Ans: _____

Use me to add

- b) There are 28  in a shop.
19 new  have arrived.
How many  are there in total ?

Ans: _____

Use me to add
