

Portion:हिंदी पाठ्य पुस्तक- पाठ ७. कोयल, पाठ १२. अभी करता हूँ

व्याकरण (हिंदी कौशल-पुस्तिका) - पाठ १२. क्रियाविशेषण,

अनेक शब्दों के लिए एक शब्द पृष्ठ संख्या-१०५-१०६(पाठ्य पुस्तक)



DELHI PUBLIC SCHOOL
NERUL, NAVI MUMBAI
SESSION 2024 – 2025
REVISION
CLASS IV – HINDI

NAME:

CLASS/SEC.:

ROLL NO.:

प्रश्न १. नीचे दिए गए गद्यांश को ध्यानपूर्वक पढ़कर प्रश्नों के उत्तर लिखिए-

गाँव की एक छोटी सी नदी थी, जिसका नाम 'सुनहरी नदी' था। इस नदी के किनारे बाग-बगीचे और हरे-भरे पेड़ थे। गाँव के बच्चे अक्सर इस नदी के किनारे खेलने जाते थे। गर्मियों में, बच्चे नदी में तैरने का आनंद लेते थे और नाव की सवारी करते थे। एक दिन, गाँव में एक बड़ा मेला लगा। बच्चे और बड़े सभी मेले में गए। वहाँ कई दुकानें लगी थीं, जैसे खिलौनों की दुकान, मिठाई की दुकान और खेलकूद के सामान की दुकान। बच्चों ने वहाँ खूब मज़े किए। उन्होंने तले हुए आलू, गुलाब जामुन और चाट खाई। मेले में, एक छोटे से लड़के ने एक बूँद के आकार का गुब्बारा देखा। वह उसे खरीदना चाहता था। लेकिन उसके पास पैसे नहीं थे। उसके दोस्तों ने मिलकर उसकी मदद की। उन्होंने अपने-अपने पैसे मिलाकर वह गुब्बारा खरीदा। लड़का बहुत खुश हुआ और उसने अपने दोस्तों का धन्यवाद किया।

(क) सुनहरी नदी के किनारे क्या था?

(ख) गर्मियों में बच्चों क्या करते थे?

(ग) मेले में बच्चों ने क्या-क्या खाया?

(घ) छोटे लड़के के दोस्तों ने गुब्बारा खरीदने के लिए क्या किया?

(ङ) नीचे दिए गए शब्दों के समान तुक वाले शब्द गद्यांश में से चुनकर लिखिए-

(अ) ठेला

(ब) सपने

(च) गद्यांश में से कोई दो संयुक्ताक्षर शब्द चुनकर लिखिए-

(छ) सही उत्तर चुनकर लिखिए-

(अ) छोटा लड़का क्या खरीदना चाहता था?

(i) चाट

(ii) गुब्बारा

(iii) मिठाई

(ब) बच्चे किसकी सवारी करते थे?

(i) घोड़े की

(ii) गाड़ी की

(iii) नाव की

प्रश्न २. नीचे दिए गए वाक्यों में उचित क्रियाविशेषण शब्दों को लिखिए-

- | | |
|------------------------------|--------------|
| (क) सोहम _____ खाता है। | (कम/अचानक) |
| (ख) बच्चे _____ हँसने लगे। | (पास/अचानक) |
| (ग) नाना जी घर _____ आए हैं। | (अभी-अभी/कम) |
| (घ) अपर्णा _____ बोलती है। | (पास/बहुत) |
| (ङ) बंदर _____ बैठा है। | (आजकल/ऊपर) |

प्रश्न ३. नीचे दिए गए वाक्यों में से क्रियाविशेषण शब्दों को छाँटकर लिखिए-

- (क) चींटी कम खाती है।
- (ख) गिलहरी पेड़ पर धीरे-से चढ़ गई।
- (ग) मगरमच्छ पानी में रहता है।
- (घ) रमन सुबह कसरत करता है।
- (ङ) खरगोश तेज़ भागता है।

प्रश्न ४. निम्नलिखित वाक्यों में रेखांकित शब्दों के लिए एक शब्द लिखिए-

- (क) इसकी कीमत बहुत ज्यादा है ।
- (ख) यह अभिनय करने वाला व्यक्ति है।
- (ग) वह आदमी पढ़ा-लिखा नहीं है।
- (घ) इस हार की तुलना नहीं की जा सकती है।

प्रश्न ५. निम्नलिखित वाक्यांशों के उचित जोड़े बनाकर लिखिए-

- | | |
|-------------------------|-----------------------|
| (क) उपकार को मानने वाला | (i) उपर्युक्त/उपरोक्त |
| (ख) जो पहले न पढ़ा हो | (ii) पाठक |
| (ग) पढ़ने वाला | (iii) अपठित |
| (घ) ऊपर कहा हुआ | (iv) कृतज्ञ |
| | (v) स्थानीय |

(क) _____ (ख) _____ (ग) _____ (घ) _____

Maths Evaluation II on 24/02/25

To be submitted on: 06/02/25

Portion: Ch 6. Fractions

Ch 7. Decimals

Ch 8. Number Patterns

Ch12. Perimeter and Area



DELHI PUBLIC SCHOOL

NERUL, NAVI MUMBAI

SESSION 2024 – 2025

REVISION

CLASS IV – MATHEMATICS

NAME:

CLASS/SEC.:

ROLL NO.:

Q1. Fill in the blanks:

- 1) The next number in the pattern 4, 12, 36, 108, _____
- 2) 5 tens + 9 ones + 6 tenths + 2 hundredths = _____
- 3) $\frac{9}{16}$ $\frac{9}{15}$ (put >, < or =)
- 4) In a rectangle, if length = 7 cm and breadth = 2 cm, then its area and perimeter are _____ and _____.
- 5) The place of the digit 8 in 26.789 is _____

Q2. Write the first five equivalent fractions of $\frac{7}{10}$.

Q3. Read the decimal number 98.765. Write it in words. Also write its decimal expanded form.

Q4. Sonia has a lawn with a flowerbed and a grassland. The grassland is in the shape of a Rectangle of dimensions: length=6m, breadth = 4m. The flowerbed is in the shape of a square of side 2m. Find:

- a) The perimeter of the flowerbed and grassland
- b) Area of the flowerbed and grassland
- c) Total area of the lawn.



PTO

Q5. Fill in the blanks to complete the number patterns:

a) $1 + 2 = 3$

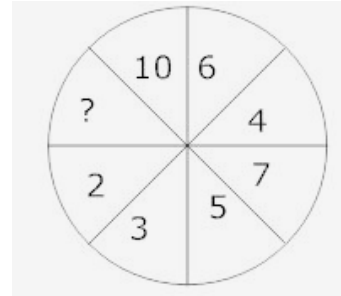
$1 + 2 + 3 = 6$

$1 + 2 + 3 + 4 = 10$



$1 + 2 + 3 + 4 + 5 = \underline{\hspace{2cm}}$

$1 + 2 + 3 + 4 + \underline{\hspace{1cm}} + \underline{\hspace{1cm}} = \underline{\hspace{2cm}}$

b)



Q6. Write the fraction for the shaded part of each figure. Match the equivalent fractions:



a) $\underline{\hspace{2cm}}$

b) $\underline{\hspace{2cm}}$

Q7. Arrange the prices in the menu in ascending order:

CAFÉ STAR	
MENU	
Item	Price
Tea	₹22.50
Coffee	₹25.00
Samosa	₹13.50
Sandwich	₹37.25
Potato chips packet	₹20.90

PTO

Q8. a) Riya was given one eighth of 40 cupcakes. Jiya was given one third of 30 cupcakes. Who got less cupcakes and by how many?

b) Which one of the following is true?

i) $\frac{1}{5} = \frac{3}{9}$

ii) $\frac{10}{10} = 1$

iii) $\frac{13}{15} > \frac{13}{14}$

iv) $\frac{9}{11} < \frac{8}{11}$

Q9. Arrange all the decimals with 6 in the hundredths place in bowl A and with 3 in the hundreds place in bowl B.

99.562	9380.254	4.239	763.4	347.21	14.165
--------	----------	-------	-------	--------	--------



A



B

Bowl A _____

Bowl B _____

Q10. Each of the following questions contains an Assertion(A) followed by a Reason(R).

Read them carefully and answer the questions based on the following options:

- a) Both Assertion(A) and Reason(R) are true and the Reason(R) is the correct explanation of Assertion(A).
- b) Both Assertion(A) and Reason(R) are true and the Reason(R) is not the correct explanation of Assertion(A).
- c) Assertion(A) is True and the Reason(R) is False.
- d) Assertion(A) is False and the Reason(R) is True.

Question 1:

Assertion(A): $\frac{6}{10}$ is an equivalent fraction for $\frac{3}{5}$.

Reason(R): Equivalent fractions are two or more fractions that are all equal.

Question 2:

Assertion(A): The length and breadth of a rectangle are 15 cm and 10 cm.
Its perimeter is 150 cm.

Reason(R): Area of the rectangle is 150 sq.cm.

Science Evaluation-2 on 03/03/25

To be submitted on: 03/02/25

Portion: Chapter 6- Our Teeth

Chapter 10- Water- A wonderful Liquid

Chapter 11- How Does Weather Change?

Chapter 13- Force, Work and Energy.



**DELHI PUBLIC SCHOOL
NERUL, NAVI MUMBAI
SESSION 2024 – 2025
REVISION
CLASS IV – SCIENCE**

NAME: _____ CLASS/SEC.: _____ ROLL NO.: _____

Q.1. Choose the most appropriate option out of the following.

- a) Which of the following is not an example of lever.
i) Pliers ii) Tongs iii) Screwdriver iv) Hammer claws
- b) _____ is soluble in water.
i) Sand ii) Salt iii) Sawdust iv) Chalk powder

Q. 2. Read the statements given below and choose the correct option.

- a) Both A and R are true and R is correct explanation of the assertion.
b) Both A and R are true and R is not the correct explanation of the assertion.
c) A is true but R is false.
d) A is false but R is true.

Assertion: A hard layer called dentine is found below the enamel.

Reason: Dentine is the hardest known substance in the human body.

Q.3. Name the following.

- a) Movement of air from sea to land during the day.
b) The energy provided by the hot interior of the Earth.

Q.4. Give reason for the following.

- a) A ball moving on the floor, moves for some distance and then stops.
b) Blowers are kept on lower surface in winters.

Q.5. Identify the types of forces shown in the image A and B.



A



B

P.T.O

Q.6. Differentiate between temporary teeth and permanent teeth. (Mention any 2 point.)

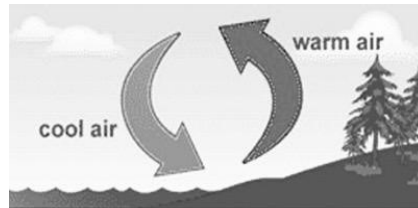
Q.7. a) Mention any two uses of water.

b) Define potable water.

Q.8. All forces does not result in work. Justify the statement.

Q.9. a) Mention any four factors which help water to evaporate faster?

b) Look at the following image and explain how does the wind blow.



Q.10. Read the following paragraph and answer the questions given below.

Water forms a significant part of our body and is required for the various functions in the body. It dissolves food material and carries it to different parts of the body through blood. Blood also contains water in it. Our body produces lots of waste material, which gets mixed in the blood. The kidneys remove this waste from the blood in the form of urine.

a) Why is water important for our body?

b) Which tissue in our body helps in transportation of dissolved materials and why?

c) How does the kidney remove the waste from the blood?

Social Studies Evaluation on 18/02/25

To be submitted on: 10/02/25

Portion: Lesson 6: The Southern Plateaus

Lesson 7: The Coastal Plains and the Islands

Lesson 8: Climate of India

Lesson 20: Our Rights and Duties



**DELHI PUBLIC SCHOOL
NERUL, NAVI MUMBAI
SESSION 2024-2025
REVISION
CLASS IV- SOCIAL STUDIES**

NAME:

CLASS/SEC. :

ROLL NO. :

General Instructions:

1. All questions are compulsory.
2. Read each question carefully and follow the instructions.

Q1. Fill in the blanks:

- a) The Eastern Coastal Plains lie between the Eastern Ghats and the _____.
- b) The _____ plateau is in the northwest of the Central Highlands.
- c) The term '_____', means India is independent and is free to govern itself.
- d) _____ is the condition of the atmosphere for a short period of time.
- e) The river _____ divides the region of the Southern Plateaus into two parts.
- f) The _____ rights ensure communities in India can protect and develop their culture.

Q2. Name the following:

- a) These rivers are snow fed and have water all year round.
- b) The latitude which passes through India almost at its centre.
- c) This coast forms the southern part of the Eastern Coastal Plains.
- d) This place lies off the Konkan coast in Mumbai and has large deposits of petroleum.


Q3. Define the following:

- a) lagoon
- b) Fundamental Rights
- c) Climate
- d) Plateaus
- e) Loo

Q4. State whether the following statements are 'TRUE' or 'FALSE':

- a) The study of weather is called meteorology.
- b) The moderate climate refers to summers being very hot and winters being very cold.
- c) The Nagarjunasagar dam is built on River Krishna.
- d) Chennai , the capital of Tamil Nadu, is located in Northern Circar.

Q5. Look at the picture given below and answer the following questions:



- a) Who was the chairman of the drafting committee of the Indian Constitution?
- b) When did the Indian Constitution come into effect?
- c) What does the Constitution of India promise to every Indian citizen?

Q6. Answer the following questions:

- a) Describe the Deccan Plateau.
- b) Elaborate on the Western Coastal Plains of India (Mention any 3 points)
- c) **The Constitution of India lays focus on Fundamental Rights as much as on Fundamental Duties.** Mention any any four Fundamental Duties which the Indian Citizens are expected to follow.
- d) Describe the climate during the winter season in India.(Mention any 3 points)
- e) What is a coral? Name the group of Islands where these are found.

Q7. On a political map of India, please mark and label the following:

- a) The coastal states on the Western Coastal Plain
 - b) The island which lies in the Arabian Sea
 - c) Odisha
 - d) Tamil Nadu
 - e) Bengaluru is the capital of this state
 - f) Chattisgarh
-

Portion:

1. Unseen Passage
2. Informal Letter Writing
3. Adverbs and their kinds
4. Past Perfect Tense
5. L-7 – APJ Abdul Kalam- The Missile Man of India
6. Poem – Paper Boats



DELHI PUBLIC SCHOOL
NERUL, NAVI MUMBAI
SESSION 2024 – 2025
REVISION
CLASS IV – ENGLISH

NAME:**CLASS/SEC.:****ROLL NO.:**

Q1. Read the passage given below carefully and answer the following questions:

Plants and animals have the hardest job of surviving in the wild world. There are many ways plants and animals have adapted to survive. Camouflage is one way animals adapt to survive. For some animals, this means that their fur, scales or skin are a similar colour to the land around them. Deer, for example have brown fur that blends in with trees. So, it's harder for predators to see them. This saves them from becoming prey to larger animals. Some animals can change colour to match the environment. Many people think of chameleons when they think of this type of camouflage, but rabbits are a great example as well. Some rabbit's fur will change colour depending on the season. Their fur maybe brown in summer to match the trees but the brown fur will fall out and white fur will grow in winter to blend in with the snow. Some moths and butterflies have designs on their wings which makes them look like snakes or owls to scare away the predators. (Para 1)

Many plants, however, grow flowers with colourful petals to attract bees. The bees help pollinate the flowers so that they can help produce new flowers. Instead of hiding, some plants and animals develop structures that aim to hurt anything that tries to hurt them. Some plants develop thorns so that animals will not eat them. Porcupines have spikes called quills covering their backs, so that animals won't dare to mess with them, let alone eat them! (Para 2)

1. _____ is one way animals adapt to survive.
 - a. Pollination
 - b. Camouflage
2. How do some moths and butterflies scare away predators?
3. How do bees help in producing new flowers?
4. What protects a porcupine from predators?
5. Find the synonym of the word 'live'. (Para 1)
6. Find the antonym of the word 'plain'. (Para 2)

PTO

QII. Fill in the blanks with the past perfect tense form of the verbs given in the brackets:

1. We _____ just _____ dinner, when my uncle rang the bell. (finish)
2. The thief _____ away before the police could catch him. (run)
3. Ria _____ already _____ for school when I reached home. (leave)
4. Rahul _____ all his sums wrong. (get)
5. The snake _____ the farmer. (bite)
6. The tiger _____ a man-eater and was a threat to the villagers. (become)
7. I _____ this book last year too. (read)
8. We _____ not _____ a single match of tennis for the past few months. (play)
9. By the time the fire brigade arrived, the building _____. (collapse)
10. I noticed that I _____ the wrong book from the library. (take)

QIII. Pick out the adverbs in the following sentences and state their kinds:

1. I go for a walk regularly.
 2. My mother kept the keys there.
 3. Tony was absent yesterday.
 4. Rubina sings melodiously.
 5. I often watch cartoons.
 6. Both of us are going out for dinner.
 7. They left now.
 8. I have met him before.
 9. Don't talk loudly.
 10. We had lunch today at the mall.
-

Marathi Evaluation on 05/03/25

To be submitted on: 07/02/25

Portion: कविता १२ फुलपाखरू झालो रे मी

पाठ १४ मेघदूत

पाठ १६ परोपकार

पाठ १८ संख्याज्ञान (अंक ५१ ते ७५)

व्याकरण – लिंग, वचन

उपयोजित लेखन – उतारा आकलन, निबंध



DELHI PUBLIC SCHOOL

NERUL, NAVI MUMBAI

SESSION 2024 – 2025

REVISION

CLASS IV - MARATHI

NAME:

CLASS/SEC:

ROLL NO:

मोर हा पक्ष्यांचा राजा आहे. त्याच्या डोक्यावर तुरा असतो. निळसर रंगाची पिसे अंगावर घेऊन तो डौलदारपणे चालत असतो. आपल्याकडे राजस्थानात मोर खूप आढळतात. मोर धान्यकण व जमिनीवरचे किडे खाऊन आपले पोट भरतो. मोराच्या मादीला लांडोर असे म्हणतात. तिला पिसारा नसतो. आकाशात दिसणारे काळे ढग पाहून मोर आनंदी होतो. तो मियाँओ - मियाँओ करून ढगांना बोलवत असतो. खूप पाऊस पडून हिरवेगार गवत सगळीकडे उगवावे असे तो सुचवितो त्याची पिसे मुले आपल्या पुस्तकांमध्ये जपून ठेवतात. श्रीकृष्णाच्या मुकुटात मोरपिसाला मान मिळाला आहे.

प्रश्न १. पक्ष्यांचा राजा कोण आहे ?

अ] चिमणी ब] कबुतर क] मोर ड] पोपट

२. आपल्याकडे खूप मोर कोठे आढळतात ?

अ] कोलकता ब] महाराष्ट्र क] गुजरात ड] राजस्थान

३. मोर काय खाऊन आपले पोट भरतो ?

अ] हिरव्या भाज्या ब] फुलातील रस

क] गवत चारा ड] धान्यकण व जमिनीवरची किडे

P.T.O

४ मोराच्या मादीला काय म्हणतात ?

अ] चिमणी ब] लांडोर क] लंथोर ड] आंडोर

५ कोणाच्या मुकुटात मोरपिसाला मान मिळाला आहे ?

अ] श्रीकृष्ण ब] राम क] अर्जुन ड] भीम

प्रश्न २ अ] खालील शब्दांचे लिंग बदला.

१. पत्नी - २. आई - ३. हत्ती -

आ] खालील शब्दांचे वचन बदला.

१. फायदा - २. दरवाजा - ३. रुपया -

प्रश्न ३. अ] मराठी शब्दांचे इंग्रजी अर्थ लिहा.

१. शूर - २. शिष्यवृत्ती - ३. पंख -

आ] समानार्थी शब्द लिहा.

१. वीज - २. पाणी -

प्रश्न ४. अ] खालील प्रश्नांची उत्तरे लिहा.

१. राज्यातील लोकांना आनंदी आनंद का झाला ?
२. फुलपाखरू कोठे आले ?
३. परोपकार या पाठातून तुम्ही कोणता बोध घ्याल ?

आ] रिकाम्या जागा भरा.

१. विनू परिस्थितीने खूप ----- होता.
२. फुलाफुलांवर बसतो मी ----- गाली हसतो मी.
३. राजाकडे पैशांची ----- नव्हती.

इ] वाक्यात उपयोग करा.

१. कळकळ - २. नक्षी -

ई] अंक लेखन सराव करणे.

५१ - ----- ते ६० - -----
